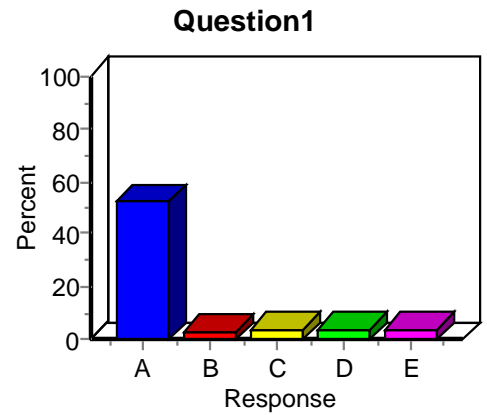


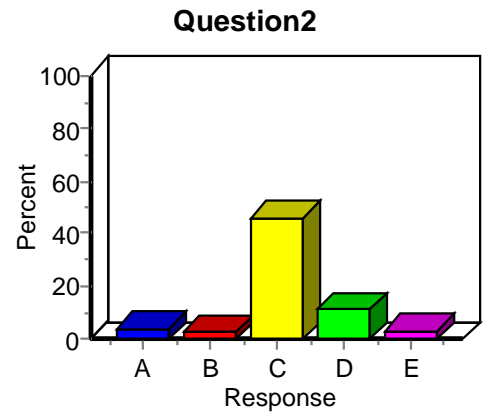
### Item Analysis: Question1

Label	Value	Frequency	Percent
<b>A</b>	<b>1</b>	<b>460</b>	<b>52.75</b>
B	2	27	3.10
C	3	33	3.78
D	4	34	3.90
E	5	37	4.24
Total Missing	-1	281	32.22
Total		872	100.00



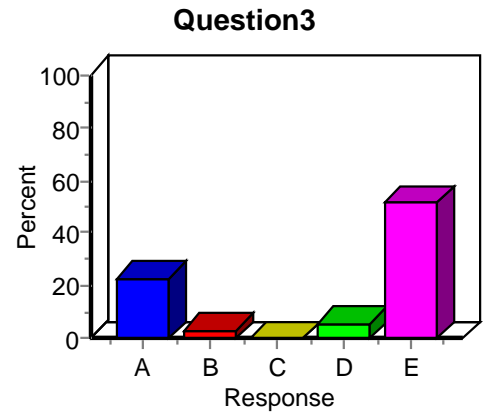
### Item Analysis: Question2

Label	Value	Frequency	Percent
A	1	38	4.36
B	2	23	2.64
<b>C</b>	<b>3</b>	<b>402</b>	<b>46.10</b>
D	4	101	11.58
E	5	30	3.44
Total Missing	-1	278	31.88
Total		872	100.00



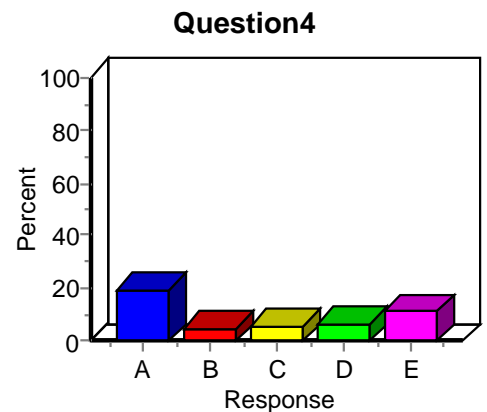
### Item Analysis: Question3

Label	Value	Frequency	Percent
A	1	198	22.71
B	2	28	3.21
C	3	3	0.34
D	4	48	5.50
<b>E</b>	<b>5</b>	<b>447</b>	<b>51.26</b>
Total Missing	-1	148	16.97
Total		872	100.00



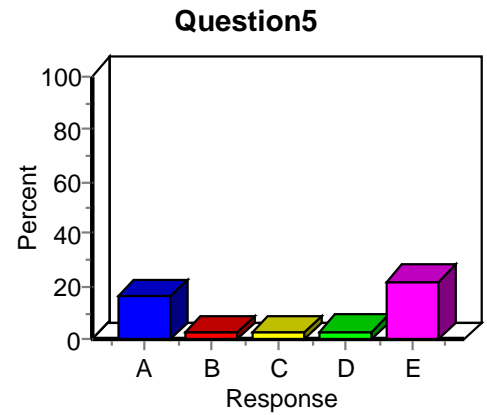
### Item Analysis: Question4

Label	Value	Frequency	Percent
A	1	172	19.72
B	2	44	5.05
C	3	51	5.85
<b>D</b>	<b>4</b>	<b>59</b>	<b>6.77</b>
E	5	98	11.24
Total Missing	-1	448	51.38
Total		872	100.00



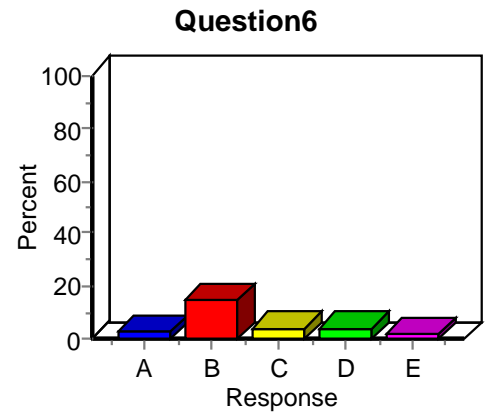
### Item Analysis: Question5

Label	Value	Frequency	Percent
<b>A</b>	<b>1</b>	<b>143</b>	<b>16.40</b>
B	2	24	2.75
C	3	18	2.06
D	4	31	3.56
E	5	192	22.02
Total Missing	-1	464	53.21
Total		872	100.00



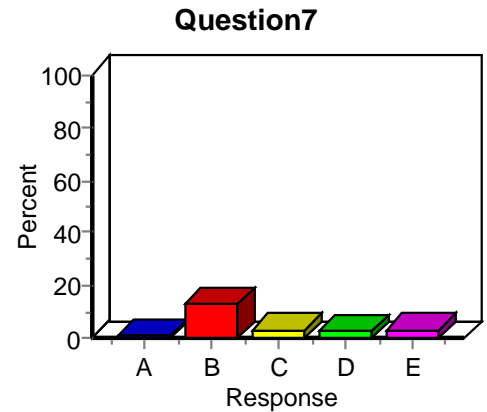
### Item Analysis: Question6

Label	Value	Frequency	Percent
A	1	18	2.06
<b>B</b>	<b>2</b>	<b>130</b>	<b>14.91</b>
C	3	33	3.78
D	4	32	3.67
E	5	16	1.83
Total Missing	-1	643	73.74
Total		872	100.00



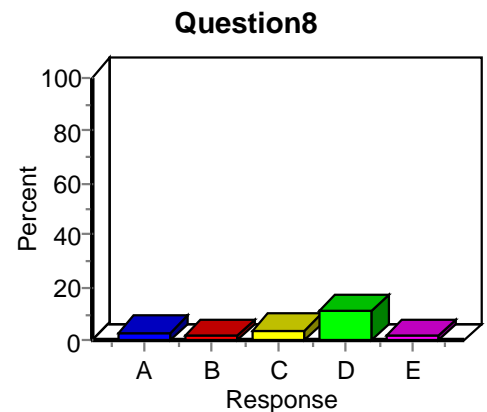
### Item Analysis: Question7

Label	Value	Frequency	Percent
A	1	6	0.69
<b>B</b>	<b>2</b>	<b>112</b>	<b>12.84</b>
C	3	29	3.33
D	4	24	2.75
E	5	29	3.33
Total Missing	-1	672	77.06
Total		872	100.00



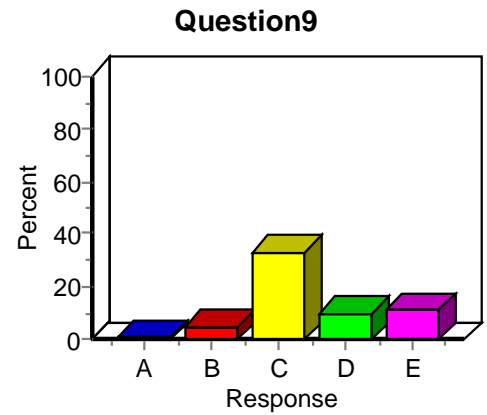
### Item Analysis: Question8

Label	Value	Frequency	Percent
A	1	31	3.56
B	2	12	1.38
C	3	36	4.13
<b>D</b>	<b>4</b>	<b>96</b>	<b>11.01</b>
E	5	15	1.72
Total Missing	-1	682	78.21
Total		872	100.00



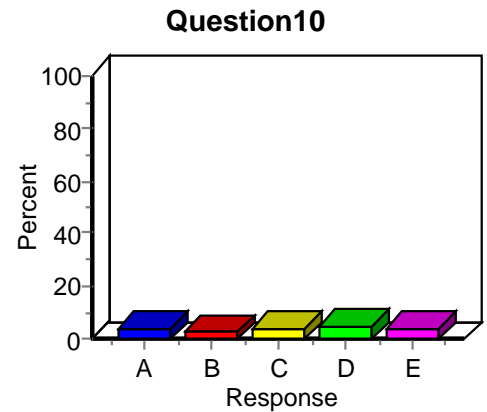
### Item Analysis: Question9

Label	Value	Frequency	Percent
A	1	7	0.80
B	2	40	4.59
<b>C</b>	<b>3</b>	<b>290</b>	<b>33.26</b>
D	4	86	9.86
E	5	95	10.89
Total Missing	-1	354	40.60
Total		872	100.00



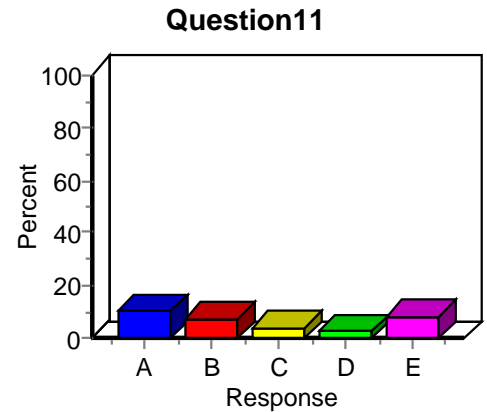
### Item Analysis: Question10

Label	Value	Frequency	Percent
A	1	32	3.67
B	2	24	2.75
C	3	33	3.78
<b>D</b>	<b>4</b>	<b>45</b>	<b>5.16</b>
E	5	36	4.13
Total Missing	-1	702	80.50
Total		872	100.00



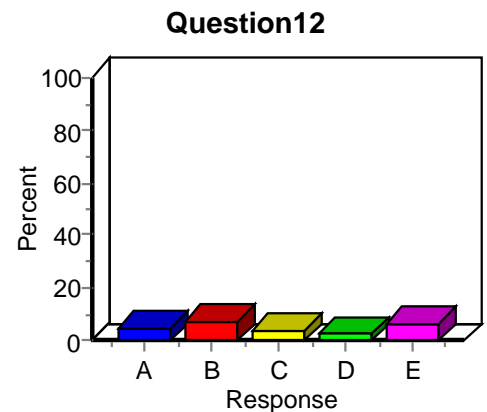
### Item Analysis: Question11

Label	Value	Frequency	Percent
<b>A</b>	<b>1</b>	<b>89</b>	<b>10.21</b>
B	2	60	6.88
C	3	32	3.67
D	4	22	2.52
E	5	71	8.14
Total Missing	-1	598	68.58
Total		872	100.00



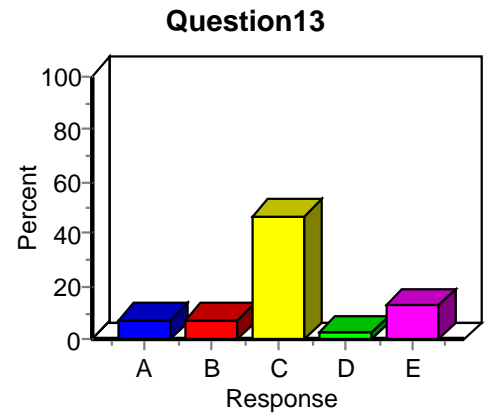
### Item Analysis: Question12

Label	Value	Frequency	Percent
A	1	40	4.59
<b>B</b>	<b>2</b>	<b>66</b>	<b>7.57</b>
C	3	34	3.90
D	4	20	2.29
E	5	56	6.42
Total Missing	-1	656	75.23
Total		872	100.00



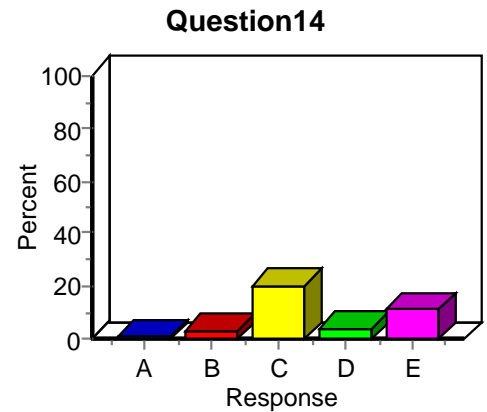
### Item Analysis: Question13

Label	Value	Frequency	Percent
A	1	61	7.00
B	2	62	7.11
<b>C</b>	<b>3</b>	<b>407</b>	<b>46.67</b>
D	4	21	2.41
E	5	111	12.73
Total Missing	-1	210	24.08
Total		872	100.00



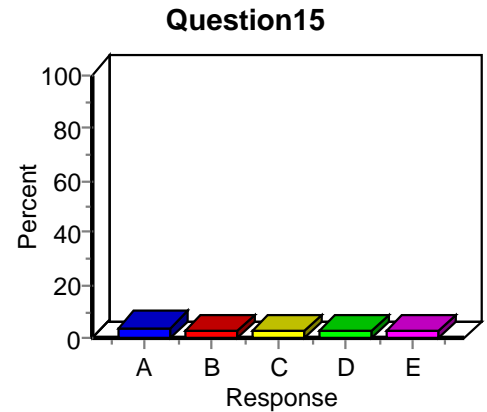
### Item Analysis: Question14

Label	Value	Frequency	Percent
A	1	10	1.15
B	2	29	3.33
<b>C</b>	<b>3</b>	<b>179</b>	<b>20.53</b>
D	4	33	3.78
E	5	97	11.12
Total Missing	-1	524	60.09
Total		872	100.00



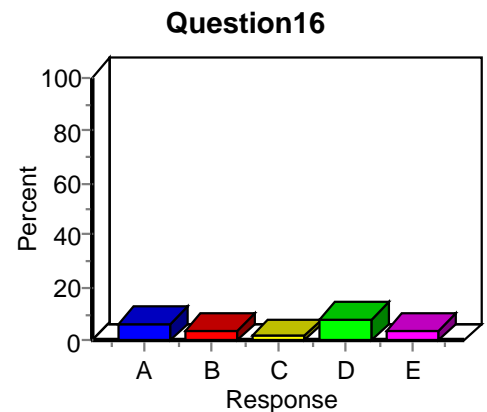
### Item Analysis: Question15

Label	Value	Frequency	Percent
<b>A</b>	<b>1</b>	<b>35</b>	<b>4.01</b>
B	2	22	2.52
C	3	23	2.64
D	4	18	2.06
E	5	22	2.52
Total Missing	-1	752	86.24
Total		872	100.00



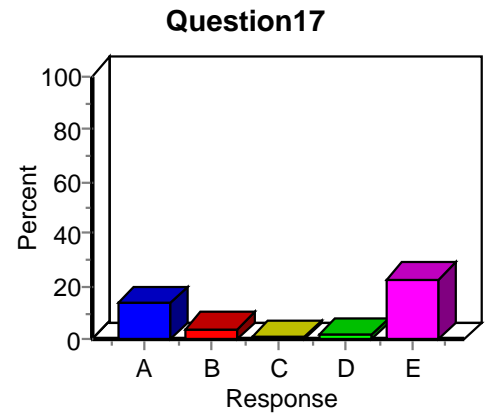
### Item Analysis: Question16

Label	Value	Frequency	Percent
<b>A</b>	<b>1</b>	<b>57</b>	<b>6.54</b>
B	2	35	4.01
C	3	12	1.38
D	4	67	7.68
E	5	38	4.36
Total Missing	-1	663	76.03
Total		872	100.00



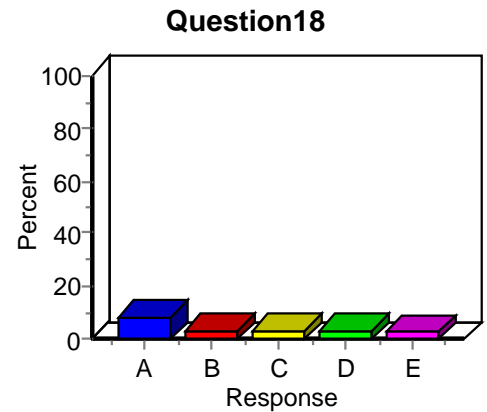
### Item Analysis: Question17

Label	Value	Frequency	Percent
<b>A</b>	<b>1</b>	<b>117</b>	<b>13.42</b>
B	2	33	3.78
C	3	10	1.15
D	4	12	1.38
E	5	196	22.48
Total Missing	-1	504	57.80
Total		872	100.00



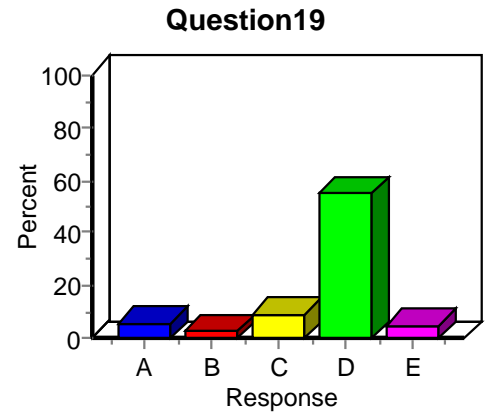
### Item Analysis: Question18

Label	Value	Frequency	Percent
A	1	69	7.91
B	2	29	3.33
C	3	26	2.98
D	4	25	2.87
<b>E</b>	<b>5</b>	<b>19</b>	<b>2.18</b>
Total Missing	-1	704	80.73
Total		872	100.00



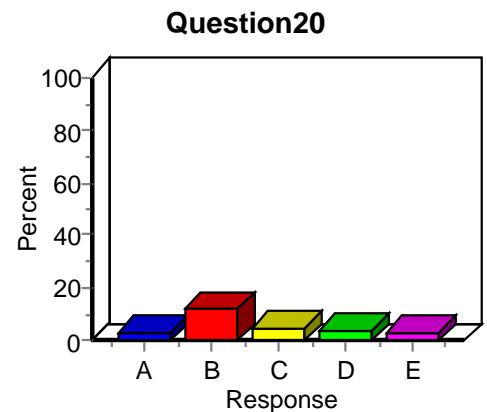
### Item Analysis: Question19

Label	Value	Frequency	Percent
A	1	49	5.62
B	2	18	2.06
C	3	74	8.49
<b>D</b>	<b>4</b>	<b>480</b>	<b>55.05</b>
E	5	39	4.47
Total Missing	-1	212	24.31
Total		872	100.00



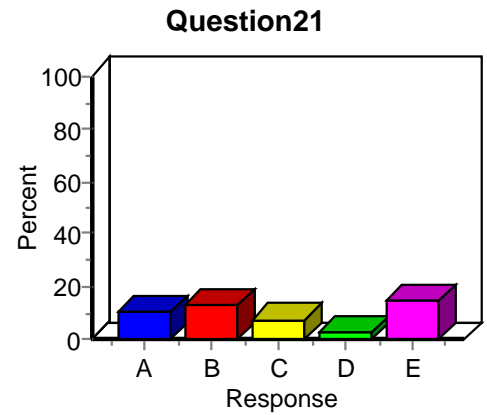
### Item Analysis: Question20

Label	Value	Frequency	Percent
A	1	25	2.87
<b>B</b>	<b>2</b>	<b>102</b>	<b>11.70</b>
C	3	45	5.16
D	4	32	3.67
E	5	27	3.10
Total Missing	-1	641	73.51
Total		872	100.00



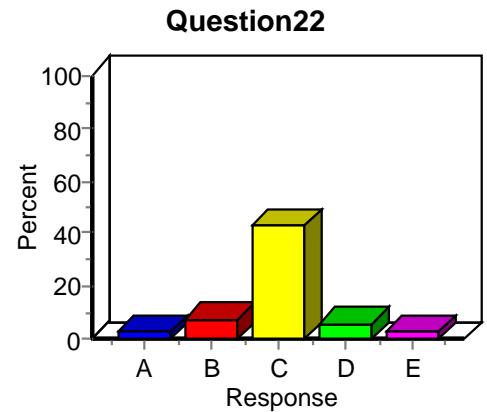
### Item Analysis: Question21

Label	Value	Frequency	Percent
A	1	91	10.44
<b>B</b>	<b>2</b>	<b>115</b>	<b>13.19</b>
C	3	65	7.45
D	4	19	2.18
E	5	124	14.22
Total Missing	-1	458	52.52
Total		872	100.00



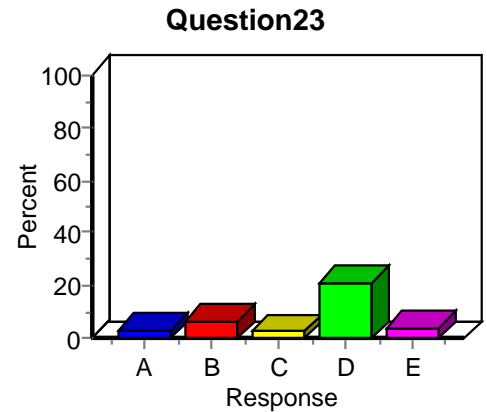
### Item Analysis: Question22

Label	Value	Frequency	Percent
A	1	21	2.41
B	2	61	7.00
<b>C</b>	<b>3</b>	<b>374</b>	<b>42.89</b>
D	4	49	5.62
E	5	23	2.64
Total Missing	-1	344	39.45
Total		872	100.00



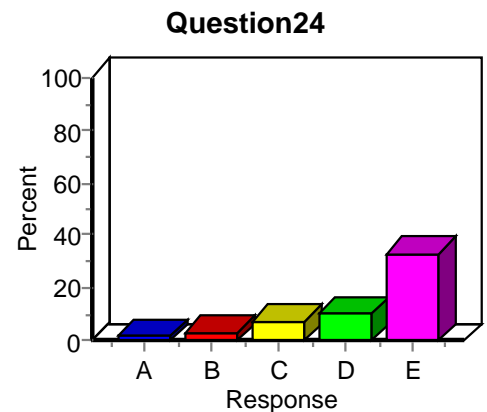
### Item Analysis: Question23

Label	Value	Frequency	Percent
A	1	25	2.87
B	2	54	6.19
C	3	21	2.41
<b>D</b>	<b>4</b>	<b>183</b>	<b>20.99</b>
E	5	35	4.01
Total Missing	-1	554	63.53
Total		872	100.00



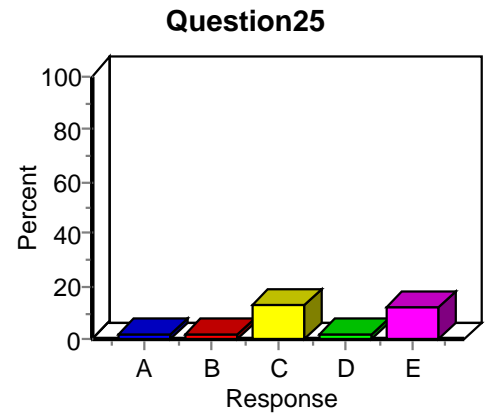
### Item Analysis: Question24

Label	Value	Frequency	Percent
A	1	17	1.95
B	2	26	2.98
C	3	61	7.00
D	4	92	10.55
<b>E</b>	<b>5</b>	<b>287</b>	<b>32.91</b>
Total Missing	-1	389	44.61
Total		872	100.00



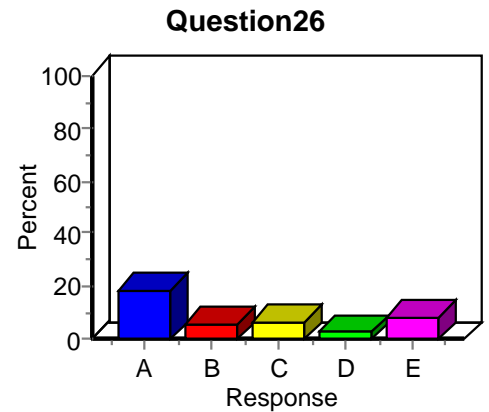
### Item Analysis: Question25

Label	Value	Frequency	Percent
A	1	14	1.61
B	2	13	1.49
<b>C</b>	<b>3</b>	<b>115</b>	<b>13.19</b>
D	4	14	1.61
E	5	105	12.04
Total Missing	-1	611	70.07
Total		872	100.00



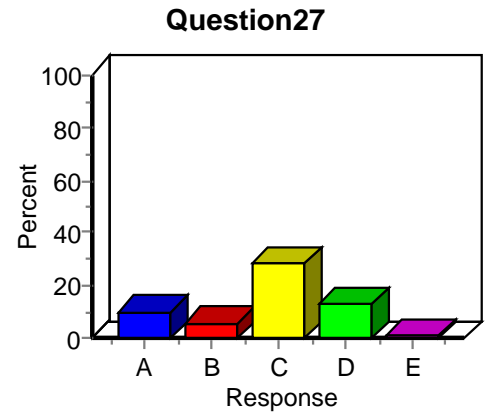
### Item Analysis: Question26

Label	Value	Frequency	Percent
<b>A</b>	<b>1</b>	<b>160</b>	<b>18.35</b>
B	2	47	5.39
C	3	54	6.19
D	4	22	2.52
E	5	69	7.91
Total Missing	-1	520	59.63
Total		872	100.00



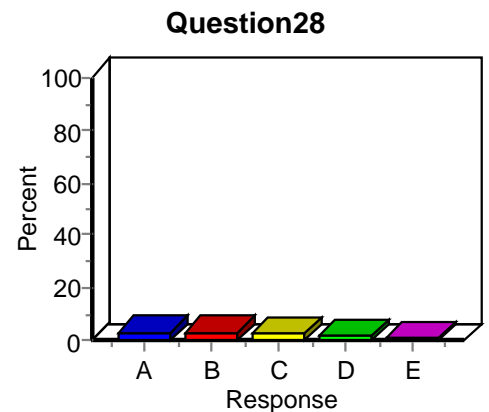
### Item Analysis: Question27

Label	Value	Frequency	Percent
A	1	84	9.63
B	2	49	5.62
<b>C</b>	<b>3</b>	<b>248</b>	<b>28.44</b>
D	4	115	13.19
E	5	8	0.92
Total Missing	-1	368	42.20
Total		872	100.00



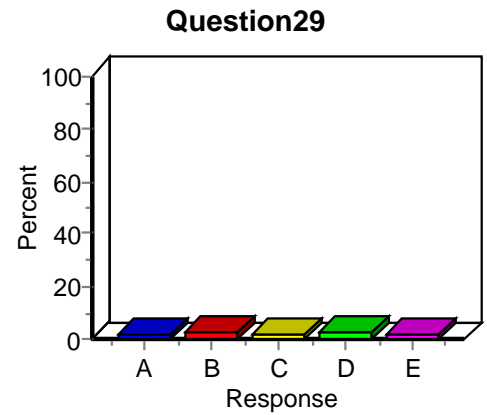
### Item Analysis: Question28

Label	Value	Frequency	Percent
<b>A</b>	<b>1</b>	<b>28</b>	<b>3.21</b>
B	2	28	3.21
C	3	19	2.18
D	4	15	1.72
E	5	8	0.92
Total Missing	-1	774	88.76
Total		872	100.00



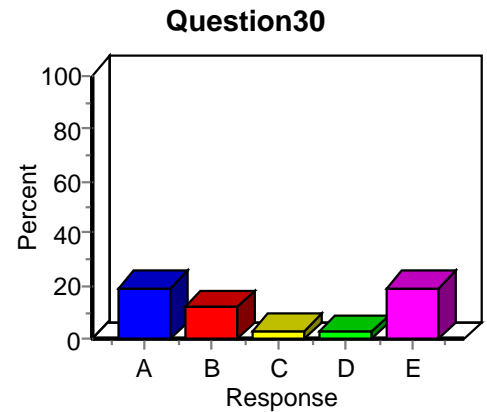
### Item Analysis: Question29

Label	Value	Frequency	Percent
<b>A</b>	<b>1</b>	<b>15</b>	<b>1.72</b>
B	2	20	2.29
C	3	17	1.95
D	4	20	2.29
E	5	14	1.61
Total Missing	-1	786	90.14
Total		872	100.00



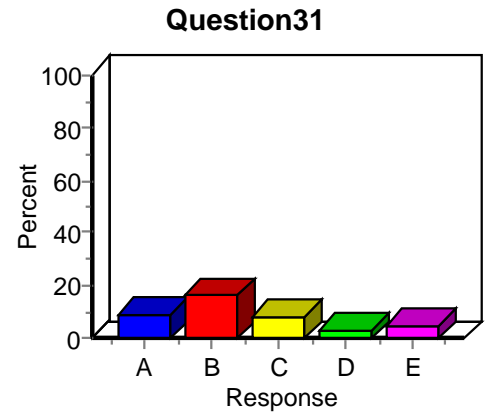
### Item Analysis: Question30

Label	Value	Frequency	Percent
<b>A</b>	<b>1</b>	<b>167</b>	<b>19.15</b>
B	2	105	12.04
C	3	31	3.56
D	4	20	2.29
E	5	169	19.38
Total Missing	-1	380	43.58
Total		872	100.00



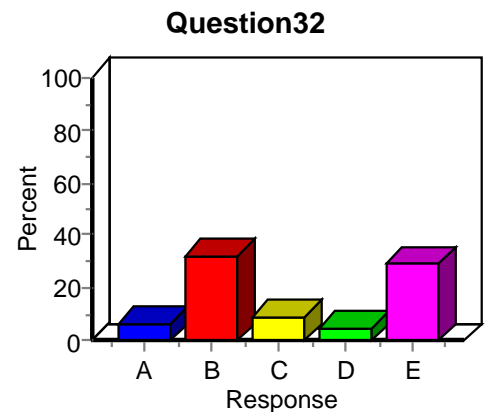
### Item Analysis: Question31

Label	Value	Frequency	Percent
A	1	76	8.72
<b>B</b>	<b>2</b>	<b>143</b>	<b>16.40</b>
C	3	69	7.91
D	4	27	3.10
E	5	41	4.70
Total Missing	-1	516	59.17
Total		872	100.00



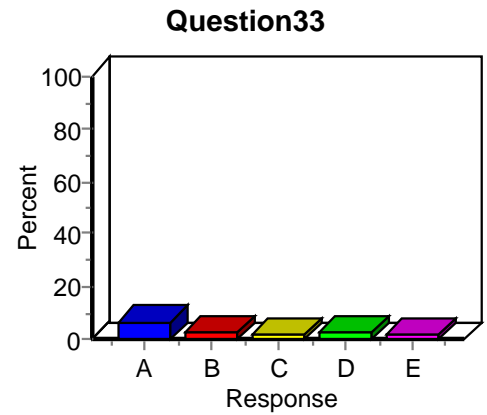
### Item Analysis: Question32

Label	Value	Frequency	Percent
A	1	54	6.19
<b>B</b>	<b>2</b>	<b>281</b>	<b>32.22</b>
C	3	77	8.83
D	4	42	4.82
E	5	252	28.90
Total Missing	-1	166	19.04
Total		872	100.00



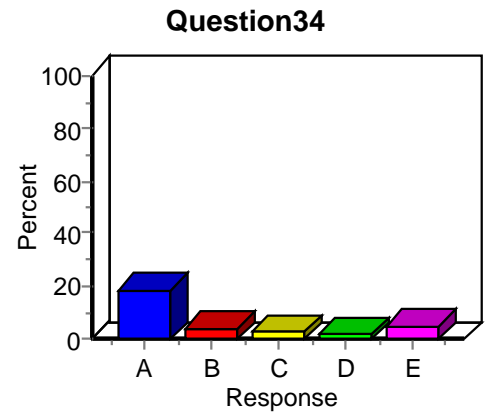
### Item Analysis: Question33

Label	Value	Frequency	Percent
A	1	59	6.77
B	2	18	2.06
C	3	17	1.95
<b>D</b>	<b>4</b>	<b>24</b>	<b>2.75</b>
E	5	11	1.26
Total Missing	-1	743	85.21
Total		872	100.00



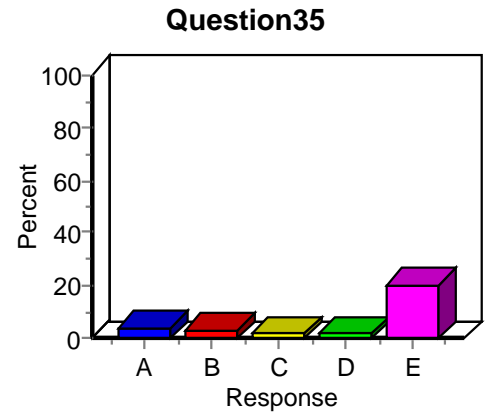
### Item Analysis: Question34

Label	Value	Frequency	Percent
<b>A</b>	<b>1</b>	<b>161</b>	<b>18.46</b>
B	2	34	3.90
C	3	18	2.06
D	4	11	1.26
E	5	45	5.16
Total Missing	-1	603	69.15
Total		872	100.00



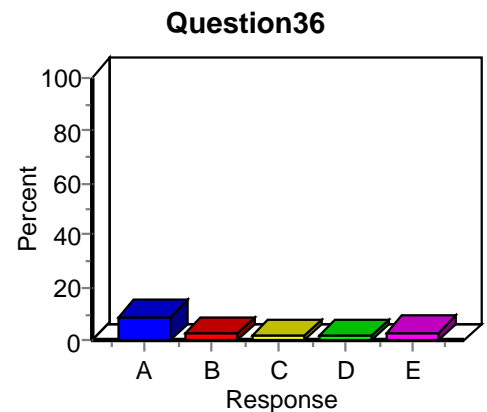
### Item Analysis: Question35

Label	Value	Frequency	Percent
A	1	38	4.36
B	2	28	3.21
C	3	14	1.61
D	4	15	1.72
<b>E</b>	<b>5</b>	<b>177</b>	<b>20.30</b>
Total Missing	-1	600	68.81
Total		872	100.00



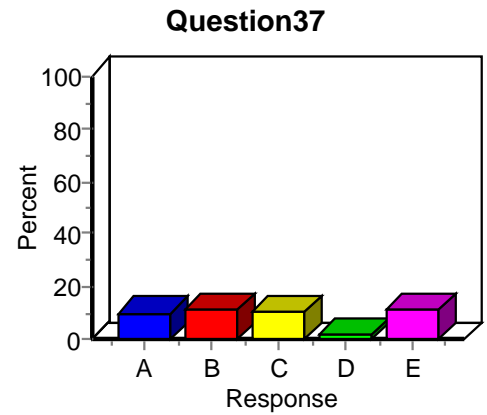
### Item Analysis: Question36

Label	Value	Frequency	Percent
<b>A</b>	<b>1</b>	<b>80</b>	<b>9.17</b>
B	2	20	2.29
C	3	15	1.72
D	4	17	1.95
E	5	30	3.44
Total Missing	-1	710	81.42
Total		872	100.00



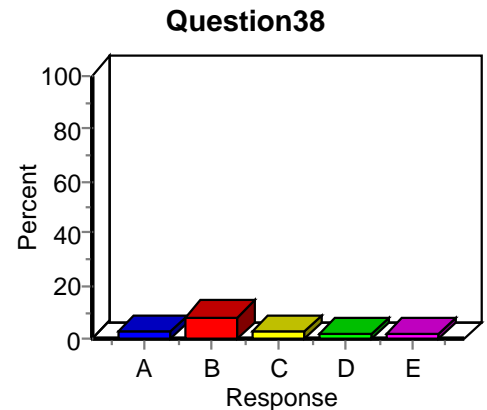
### Item Analysis: Question37

Label	Value	Frequency	Percent
A	1	84	9.63
<b>B</b>	<b>2</b>	<b>96</b>	<b>11.01</b>
C	3	94	10.78
D	4	13	1.49
E	5	95	10.89
Total Missing	-1	490	56.19
Total		872	100.00



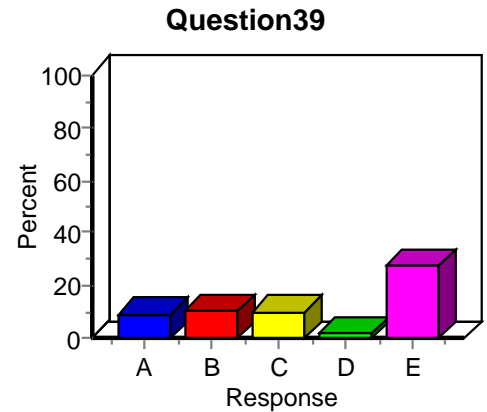
### Item Analysis: Question38

Label	Value	Frequency	Percent
A	1	22	2.52
B	2	68	7.80
C	3	23	2.64
<b>D</b>	<b>4</b>	<b>13</b>	<b>1.49</b>
E	5	14	1.61
Total Missing	-1	732	83.94
Total		872	100.00



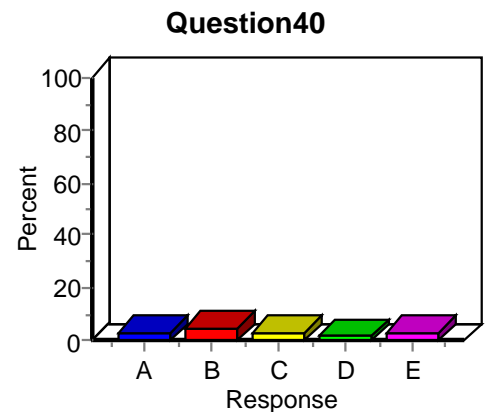
### Item Analysis: Question39

Label	Value	Frequency	Percent
A	1	76	8.72
B	2	91	10.44
C	3	87	9.98
D	4	17	1.95
<b>E</b>	<b>5</b>	<b>237</b>	<b>27.18</b>
Total Missing	-1	364	41.74
Total		872	100.00



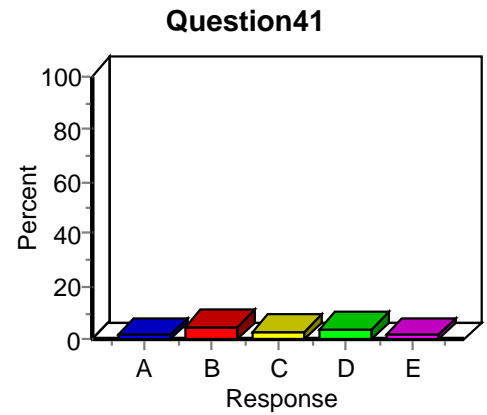
### Item Analysis: Question40

Label	Value	Frequency	Percent
A	1	27	3.10
B	2	44	5.05
<b>C</b>	<b>3</b>	<b>26</b>	<b>2.98</b>
D	4	12	1.38
E	5	28	3.21
Total Missing	-1	735	84.29
Total		872	100.00



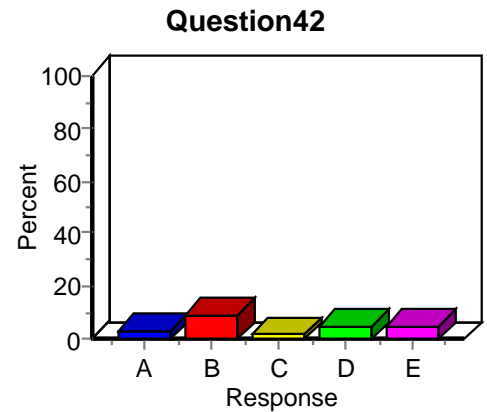
### Item Analysis: Question41

Label	Value	Frequency	Percent
A	1	12	1.38
B	2	41	4.70
C	3	27	3.10
<b>D</b>	<b>4</b>	<b>35</b>	<b>4.01</b>
E	5	13	1.49
Total Missing	-1	744	85.32
Total		872	100.00



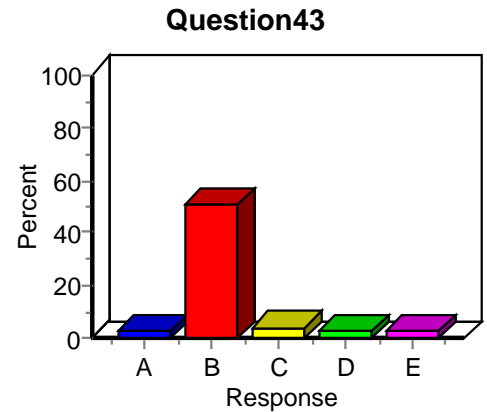
### Item Analysis: Question42

Label	Value	Frequency	Percent
A	1	26	2.98
<b>B</b>	<b>2</b>	<b>79</b>	<b>9.06</b>
C	3	17	1.95
D	4	40	4.59
E	5	43	4.93
Total Missing	-1	667	76.49
Total		872	100.00



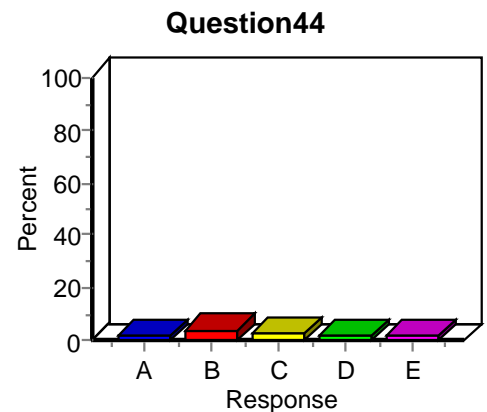
### Item Analysis: Question43

Label	Value	Frequency	Percent
A	1	20	2.29
<b>B</b>	<b>2</b>	<b>445</b>	<b>51.03</b>
C	3	35	4.01
D	4	24	2.75
E	5	18	2.06
Total Missing	-1	330	37.84
Total		872	100.00



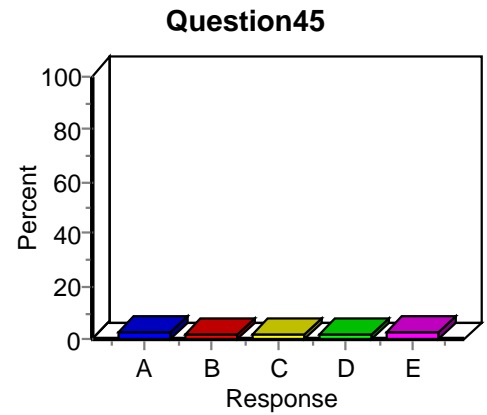
### Item Analysis: Question44

Label	Value	Frequency	Percent
A	1	17	1.95
B	2	32	3.67
C	3	22	2.52
<b>D</b>	<b>4</b>	<b>16</b>	<b>1.83</b>
E	5	15	1.72
Total Missing	-1	770	88.30
Total		872	100.00



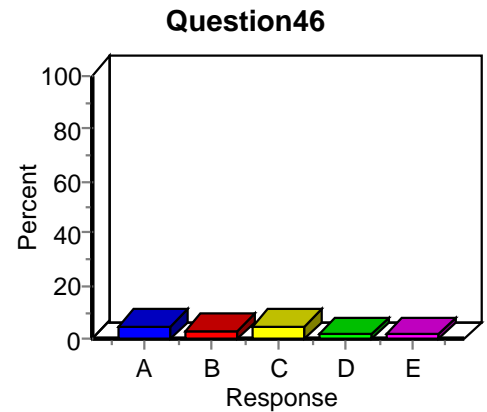
### Item Analysis: Question45

Label	Value	Frequency	Percent
<b>A</b>	<b>1</b>	<b>24</b>	<b>2.75</b>
B	2	17	1.95
C	3	15	1.72
D	4	16	1.83
E	5	18	2.06
Total Missing	-1	782	89.68
Total		872	100.00



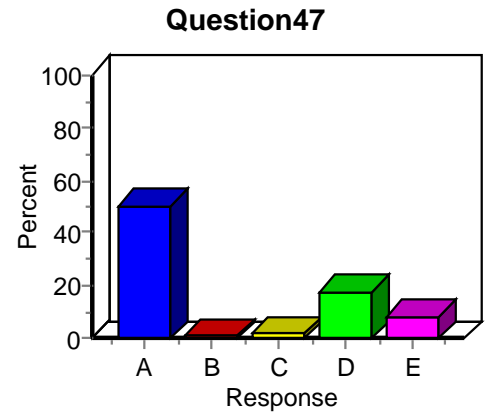
### Item Analysis: Question46

Label	Value	Frequency	Percent
A	1	45	5.16
B	2	28	3.21
<b>C</b>	<b>3</b>	<b>43</b>	<b>4.93</b>
D	4	16	1.83
E	5	16	1.83
Total Missing	-1	724	83.03
Total		872	100.00



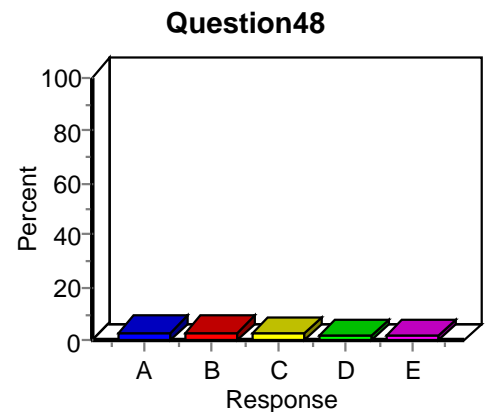
### Item Analysis: Question47

Label	Value	Frequency	Percent
A	1	438	50.23
B	2	10	1.15
<b>C</b>	<b>3</b>	<b>17</b>	<b>1.95</b>
D	4	153	17.55
E	5	73	8.37
Total Missing	-1	181	20.76
Total		872	100.00



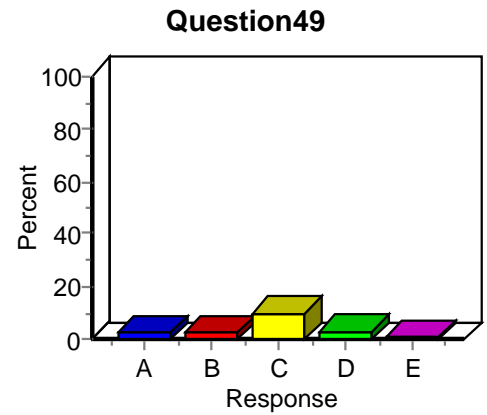
### Item Analysis: Question48

Label	Value	Frequency	Percent
<b>A</b>	<b>1</b>	<b>25</b>	<b>2.87</b>
B	2	29	3.33
C	3	18	2.06
D	4	12	1.38
E	5	13	1.49
Total Missing	-1	775	88.88
Total		872	100.00



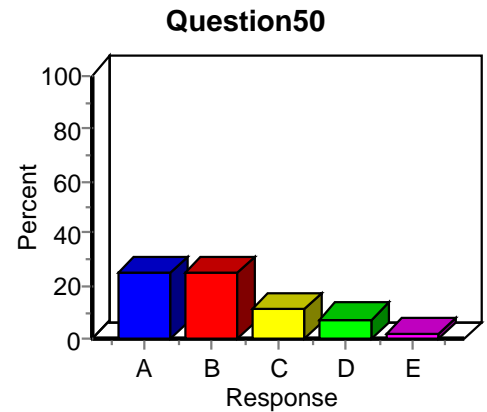
### Item Analysis: Question49

Label	Value	Frequency	Percent
A	1	21	2.41
B	2	21	2.41
<b>C</b>	<b>3</b>	<b>82</b>	<b>9.40</b>
D	4	26	2.98
E	5	4	0.46
Total Missing	-1	718	82.34
Total		872	100.00



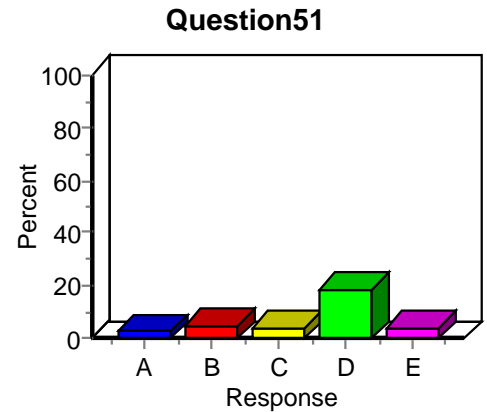
### Item Analysis: Question50

Label	Value	Frequency	Percent
A	1	216	24.77
B	2	218	25.00
<b>C</b>	<b>3</b>	<b>100</b>	<b>11.47</b>
D	4	65	7.45
E	5	12	1.38
Total Missing	-1	261	29.93
Total		872	100.00



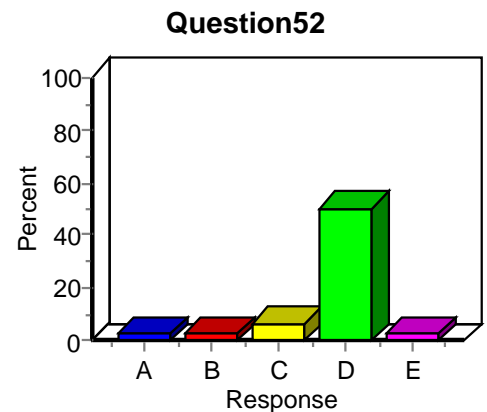
### Item Analysis: Question51

Label	Value	Frequency	Percent
A	1	18	2.06
B	2	45	5.16
C	3	32	3.67
<b>D</b>	<b>4</b>	<b>159</b>	<b>18.23</b>
E	5	36	4.13
Total Missing	-1	582	66.74
Total		872	100.00



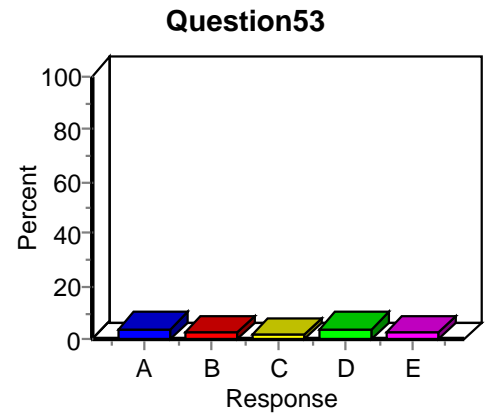
### Item Analysis: Question52

Label	Value	Frequency	Percent
A	1	20	2.29
B	2	24	2.75
C	3	55	6.31
<b>D</b>	<b>4</b>	<b>435</b>	<b>49.89</b>
E	5	23	2.64
Total Missing	-1	315	36.12
Total		872	100.00



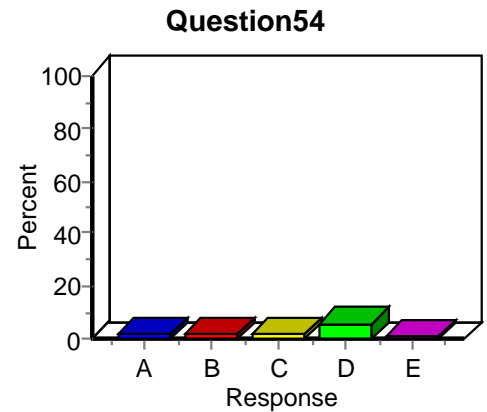
### Item Analysis: Question53

Label	Value	Frequency	Percent
A	1	36	4.13
B	2	22	2.52
C	3	17	1.95
<b>D</b>	<b>4</b>	<b>37</b>	<b>4.24</b>
E	5	22	2.52
Total Missing	-1	738	84.63
Total		872	100.00



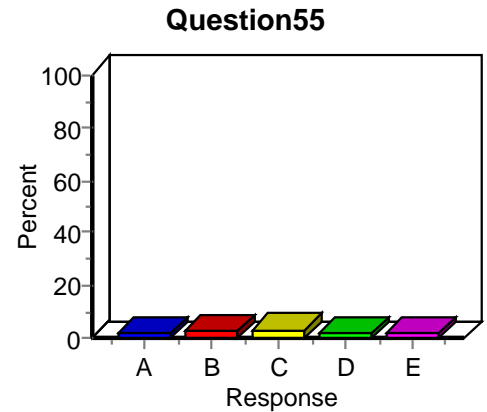
### Item Analysis: Question54

Label	Value	Frequency	Percent
A	1	11	1.26
B	2	17	1.95
C	3	17	1.95
<b>D</b>	<b>4</b>	<b>51</b>	<b>5.85</b>
E	5	10	1.15
Total Missing	-1	766	87.84
Total		872	100.00



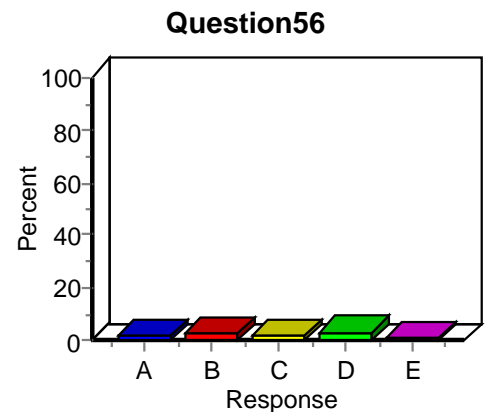
### Item Analysis: Question55

Label	Value	Frequency	Percent
A	1	14	1.61
<b>B</b>	<b>2</b>	<b>20</b>	<b>2.29</b>
C	3	28	3.21
D	4	15	1.72
E	5	11	1.26
Total Missing	-1	784	89.91
Total		872	100.00



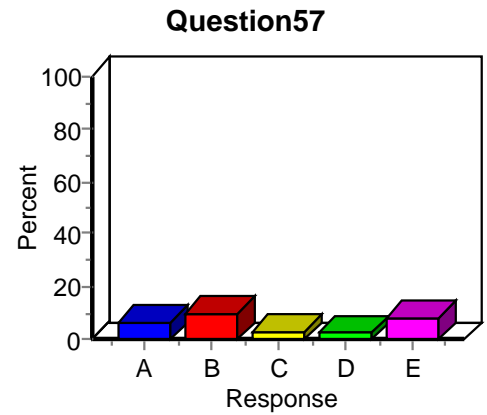
### Item Analysis: Question56

Label	Value	Frequency	Percent
A	1	17	1.95
B	2	23	2.64
C	3	15	1.72
<b>D</b>	<b>4</b>	<b>25</b>	<b>2.87</b>
E	5	7	0.80
Total Missing	-1	785	90.02
Total		872	100.00



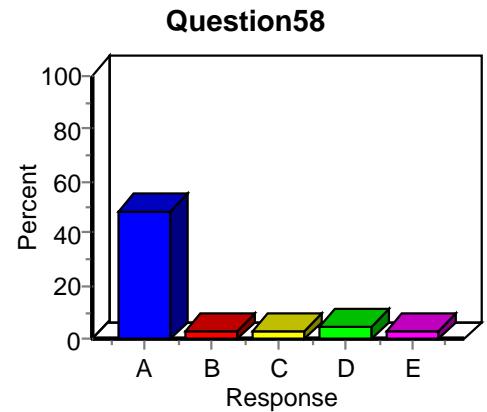
### Item Analysis: Question57

Label	Value	Frequency	Percent
A	1	53	6.08
<b>B</b>	<b>2</b>	<b>87</b>	<b>9.98</b>
C	3	30	3.44
D	4	18	2.06
E	5	69	7.91
Total Missing	-1	615	70.53
Total		872	100.00



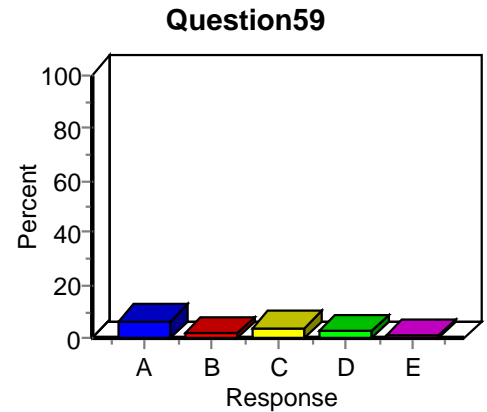
### Item Analysis: Question58

Label	Value	Frequency	Percent
<b>A</b>	<b>1</b>	<b>420</b>	<b>48.17</b>
B	2	29	3.33
C	3	25	2.87
D	4	39	4.47
E	5	29	3.33
Total Missing	-1	330	37.84
Total		872	100.00



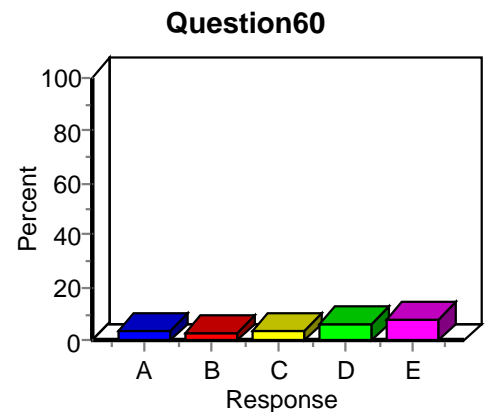
### Item Analysis: Question59

Label	Value	Frequency	Percent
A	1	55	6.31
B	2	16	1.83
<b>C</b>	<b>3</b>	<b>37</b>	<b>4.24</b>
D	4	18	2.06
E	5	9	1.03
Total Missing	-1	737	84.52
Total		872	100.00



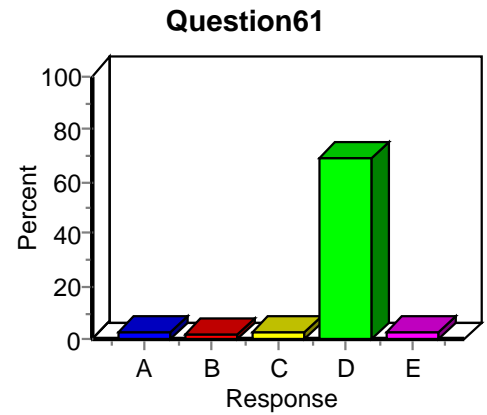
### Item Analysis: Question60

Label	Value	Frequency	Percent
A	1	36	4.13
<b>B</b>	<b>2</b>	<b>28</b>	<b>3.21</b>
C	3	35	4.01
D	4	56	6.42
E	5	73	8.37
Total Missing	-1	644	73.85
Total		872	100.00



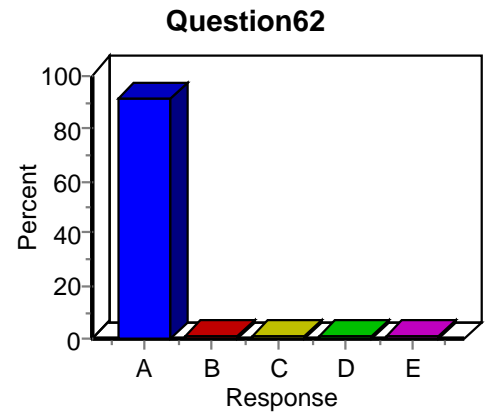
### Item Analysis: Question61

Label	Value	Frequency	Percent
A	1	19	2.18
B	2	15	1.72
C	3	18	2.06
<b>D</b>	<b>4</b>	<b>596</b>	<b>68.35</b>
E	5	24	2.75
Total Missing	-1	200	22.94
Total		872	100.00



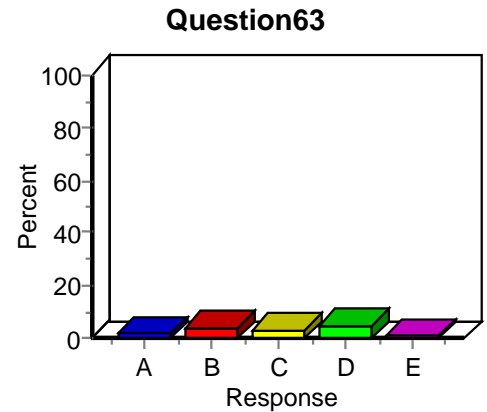
### Item Analysis: Question62

Label	Value	Frequency	Percent
<b>A</b>	<b>1</b>	<b>794</b>	<b>91.06</b>
B	2	7	0.80
C	3	9	1.03
D	4	9	1.03
E	5	5	0.57
Total Missing	-1	48	5.50
Total		872	100.00



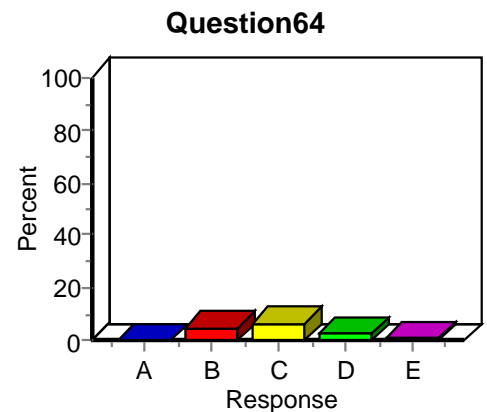
### Item Analysis: Question63

Label	Value	Frequency	Percent
A	1	17	1.95
B	2	34	3.90
C	3	26	2.98
<b>D</b>	<b>4</b>	<b>43</b>	<b>4.93</b>
E	5	8	0.92
Total Missing	-1	744	85.32
Total		872	100.00



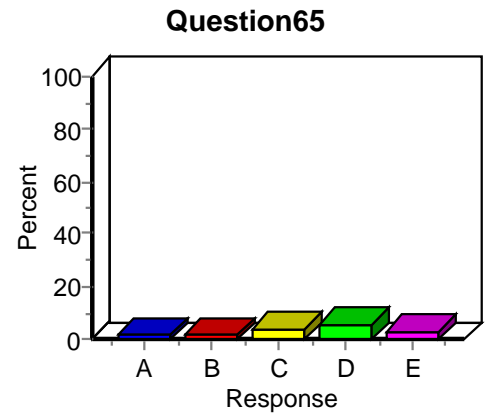
### Item Analysis: Question64

Label	Value	Frequency	Percent
A	1	3	0.34
B	2	45	5.16
<b>C</b>	<b>3</b>	<b>59</b>	<b>6.77</b>
D	4	22	2.52
E	5	8	0.92
Total Missing	-1	735	84.29
Total		872	100.00



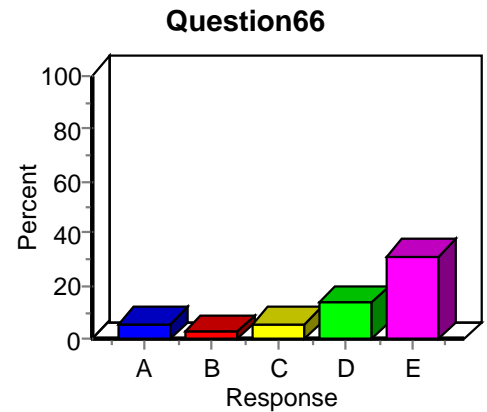
### Item Analysis: Question65

Label	Value	Frequency	Percent
A	1	13	1.49
B	2	15	1.72
C	3	32	3.67
<b>D</b>	<b>4</b>	<b>50</b>	<b>5.73</b>
E	5	29	3.33
Total Missing	-1	733	84.06
Total		872	100.00



### Item Analysis: Question66

Label	Value	Frequency	Percent
A	1	47	5.39
B	2	19	2.18
C	3	48	5.50
D	4	117	13.42
<b>E</b>	<b>5</b>	<b>275</b>	<b>31.54</b>
Total Missing	-1	366	41.97
Total		872	100.00



### Item Analysis: Question67

Label	Value	Frequency	Percent
A	1	12	1.38
B	2	14	1.61
C	3	21	2.41
D	4	9	1.03
<b>E</b>	<b>5</b>	<b>21</b>	<b>2.41</b>
Total Missing	-1	795	91.17
Total		872	100.00

